


MATHS

1) Use the stem sentence to record the fraction of the whole that has been shaded.



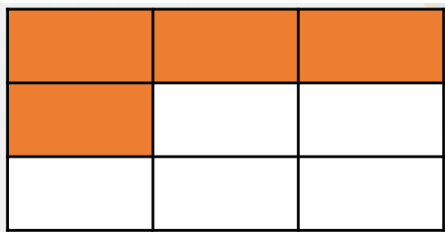
'Divide the shape into equal parts. Select of those equal parts. The fraction is'




'Divide the shape into equal parts. Select of those equal parts. The fraction is'



'Divide the shape into equal parts. Select of those equal parts. The fraction is'




'Divide the shape into equal parts. Select of those equal parts. The fraction is'



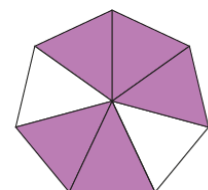
2) What fraction of the whole window will need new window panes?

3) The whole metre is divided into _____ equal parts.

The plant measures _____ of the whole metre.



4) Which model shows that $\frac{5}{7}$ are shaded? Explain how you know.



Year 3 Spellings

/m/ spellings

	How many syllables?	Syllable 1	Syllable 2	Syllable 3	Check each syllable and read the word as a whole.
e.g. favourite	3	fa	vour	ite	favourite
autumn					
condemn					
summit					
limb					
common					
simmer					
climbing					
grimy					
motor					
timepiece					